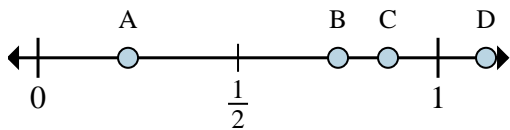


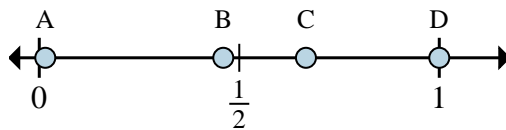


Determine which letter best shows the location of the fraction.



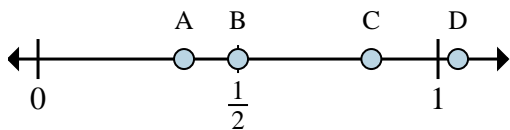
1a) Which letter best shows  $\frac{7}{8}$ ?

1b) Which letter best shows  $\frac{6}{8}$ ?



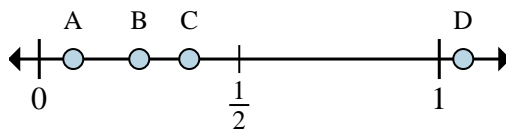
2a) Which letter best shows  $\frac{6}{6}$ ?

2b) Which letter best shows  $\frac{4}{6}$ ?



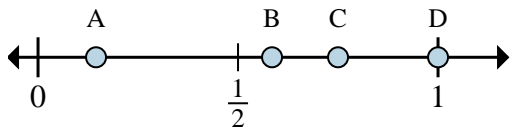
2a) Which letter best shows  $\frac{3}{6}$ ?

2b) Which letter best shows  $\frac{5}{6}$ ?



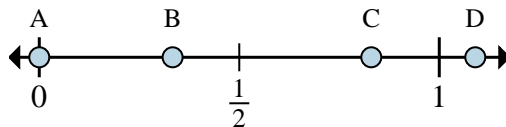
4a) Which letter best shows  $\frac{3}{8}$ ?

4b) Which letter best shows  $\frac{2}{8}$ ?



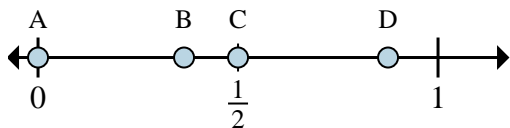
3a) Which letter best shows  $\frac{4}{4}$ ?

3b) Which letter best shows  $\frac{3}{4}$ ?



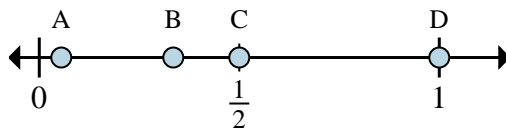
6a) Which letter best shows  $\frac{0}{3}$ ?

6b) Which letter best shows  $\frac{1}{3}$ ?



4a) Which letter best shows  $\frac{0}{8}$ ?

4b) Which letter best shows  $\frac{4}{8}$ ?



8a) Which letter best shows  $\frac{1}{2}$ ?

8b) Which letter best shows  $\frac{2}{2}$ ?

Answers

1a. \_\_\_\_\_

1b. \_\_\_\_\_

2a. \_\_\_\_\_

2b. \_\_\_\_\_

3a. \_\_\_\_\_

3b. \_\_\_\_\_

4a. \_\_\_\_\_

4b. \_\_\_\_\_

5a. \_\_\_\_\_

5b. \_\_\_\_\_

6a. \_\_\_\_\_

6b. \_\_\_\_\_

7a. \_\_\_\_\_

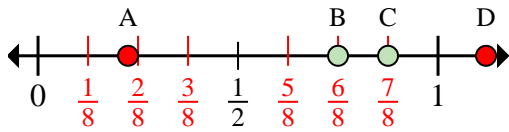
7b. \_\_\_\_\_

8a. \_\_\_\_\_

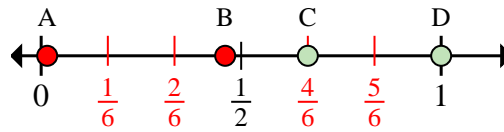
8b. \_\_\_\_\_



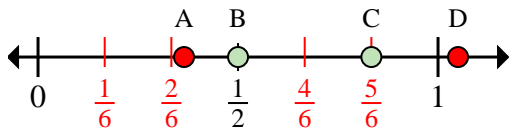
Determine which letter best shows the location of the fraction.



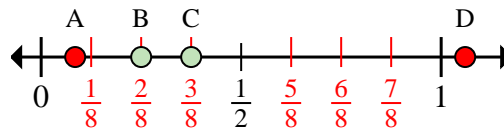
- 1a) Which letter best shows  $\frac{7}{8}$ ?
- 2b) Which letter best shows  $\frac{6}{8}$ ?



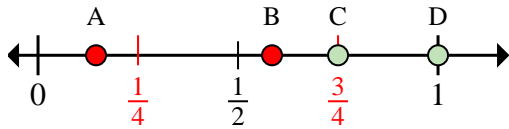
- 3a) Which letter best shows  $\frac{6}{6}$ ?
- 4b) Which letter best shows  $\frac{4}{6}$ ?



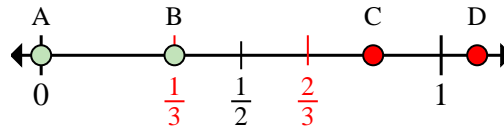
- 5a) Which letter best shows  $\frac{3}{6}$ ?
- 6b) Which letter best shows  $\frac{5}{6}$ ?



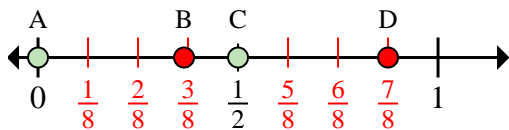
- 7a) Which letter best shows  $\frac{3}{8}$ ?
- 8b) Which letter best shows  $\frac{2}{8}$ ?



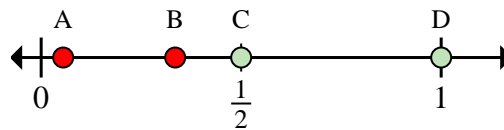
- 9a) Which letter best shows  $\frac{4}{4}$ ?
- 10b) Which letter best shows  $\frac{3}{4}$ ?



- 11a) Which letter best shows  $\frac{0}{3}$ ?
- 12b) Which letter best shows  $\frac{1}{3}$ ?



- 13a) Which letter best shows  $\frac{0}{8}$ ?
- 14b) Which letter best shows  $\frac{4}{8}$ ?



- 15a) Which letter best shows  $\frac{1}{2}$ ?
- 16b) Which letter best shows  $\frac{2}{2}$ ?

Answers

1a. C

1b. B

2a. D

2b. C

3a. B

3b. C

4a. C

4b. B

5a. D

5b. C

6a. A

6b. B

7a. A

7b. C

8a. C

8b. D